

READING TASK SHEET

1

Name: _____

Date: _____

Class: _____

Join the sentence beginnings and endings to make the sentences correct. Colour the matching pairs in the same colour.

Beginning

Ending

Gazelles are always watching out

and put their heads on each other's backs.

The male wildebeest charge at one another

and very large teeth.

Baboons have a thick mane of hair


and can run very fast.

Zebras often stand in pairs

and butt with their horns.

Gazelles take off together

for lions, cheetahs and leopards.



Attention Years 7 -10 Music Students

All students having private violin lessons with Ms Woodruff in 2007 need to register at the school office by Friday 21 November 2006



Shapes and Objects






Name _____


Class _____ Date _____

MA3P6201 Identify name and use common terms to describe features of similar shapes and objects.


MA3P6202 Compare and classify shapes and objects using simple spatial criteria.

1 Colour the correct tag.

- | | | | |
|---|---|----------|----------|
| a |  | square | circle |
| b |  | square | cube |
| c |  | triangle | oblong |
| d |  | cone | triangle |
| e |  | circle | cylinder |



2 Draw lines to match the shapes.



3 What am I? Colour the correct shape.

a I have 6 faces that are the same.



b I have 2 faces and one is a circle.



PUPPY PUZZLE

Name _____

Spelling patterns

In Puppy Puzzle there are lots of spelling patterns to explore. Some of these patterns are at the beginning of words and some are at the end.

Find some more words in the book that follow these spelling patterns.

th	-ight	-y
the there	delight	Harry puppy

And these spelling patterns too!

tr	ck	ought
trooped	lick	thought

You will need to look for other words to add to these lists from other books or from around the classroom. You may wish to start lists for your own spelling patterns that you discover as well.

--	--	--



PROBLEM SOLVING TASK CARDS - Creating a Tree Diagram


Problem 10

Number 1 2 3

Level 2

Jaani has four white mice, two males and two females. Each of the two couples has three female baby mice. Then each of these females has four babies.

One night Jaani's little sister Aisha leaves the mice cage open and eight escape. How many mice does Jaani have left?




Problem 11

Number 1 2 3

Level 2

There are four letters available to make up a car number plate, W, X, Y and Z. The number plate must have only three letters, but they can be placed in any order. How many different number plates can you make?




Problem 12

Number 1 2 3

Level 2

The local youth club is organising a chess competition. Each player must play each other player in the competition. How many games will there be for the whole competition if there are six chess players?



St Stephen's School
123 Smith St
Smithville, NSW, 1234

Students in Year 7 have the opportunity to attend the Australian Museum.

They have been studying the ABC TV Series Bush Mechanics and learning about the documentary genre.

This excursion will build on their understanding of indigenous Australians that they are developing in this unit.

Students will visit the indigenous Australians exhibit and then enjoy lunch in Hyde Park.

Date: 8 September

Time: Students will leave the school at recess, and return to school just before the end of the normal school day.

Cost: Free

Transport: Students will walk to and from the venue.

Dress: Full school uniform.

Requirements: Students are expected to bring their own lunch, clipboard and pen. Please keep luggage to a minimum.

Queries: If you have any questions or concerns about this excursion please contact John Smith in English. Ph: 5555 1234

Permission slip for Year 7 to visit the Australian Museum 8 September


I give permission for ----- to attend the excursion to the Australian Museum on 8 Sept.

I understand that students will be walking to and from the museum, and that students will provide their own lunch, clipboard and pen.

Print name of parent/ guardian

Signature

Date



Yr 8 : WORKSHEET 7

26 AUGUST

Here are the first few bars of Beethoven's Caprices 10 & 12,
Opus 26 (International Music Company: 545 Fifth Avenue N.Y.)
For each note:

- Is the timesignature simple or compound
- The key of the Caprice
- The tempo of the caprice
- the volume at which it would be played
- circle which of the following are used in caprice 10
 - slur
 - staccato
 - decrescendo
 - accents

DISCOVERY.COM HOME


DISCOVERY SCHOOL'S

PUZZLEMAKER

www.discoveryschool.com

TESSERACT'S MAZES

"SUNFACE"



© Copyright 1998, Network Solution Developers, Inc., All rights reserved.



Review Vocabulary Quiz

Name: _____

Match the words in the first column to the best available answer in the second column.

- | | |
|--------------------|--|
| _____ scatterplot | 1) top part of a fraction |
| _____ equilateral | 2) positive and negative whole numbers |
| _____ FOIL | 3) replace |
| _____ integer | 4) guess the answer |
| _____ perimeter | 5) bottom part of a fraction |
| _____ equation | 6) data plotted on a coordinate plane |
| _____ quotient | 7) what you multiply |
| _____ mixed number | 8) integer with a fraction |
| _____ factor | 9) expression with an equal sign |
| _____ volume | 10) how to move the x and y values |
| _____ substitute | 11) answer in a division question |
| _____ estimate | 12) how much an object can hold |
| _____ mapping | 13) distance around |
| _____ denominator | 14) all three sides and angles equal |
| _____ numerator | 15) binomial times a binomial |

Solution

Visit Worksheet Generator at DiscoverySchool.com



